



**Cambridge Assessment International Education**  
Cambridge International General Certificate of Secondary Education

CANDIDATE  
NAME

CENTRE  
NUMBER

--	--	--	--	--

CANDIDATE  
NUMBER

--	--	--	--

\* 8 0 5 7 6 3 5 5 1 5 \*



**CHEMISTRY**

**0620/42**

Paper 4 Theory (Extended)

**May/June 2019**

**1 hour 15 minutes**

Candidates answer on the Question Paper.

No Additional Materials are required.

**READ THESE INSTRUCTIONS FIRST**

Write your centre number, candidate number and name on all the work you hand in.

Write in dark blue or black pen.

You may use an HB pencil for any diagrams or graphs.

Do not use staples, paper clips, glue or correction fluid.

DO **NOT** WRITE IN ANY BARCODES.

Answer **all** questions.

Electronic calculators may be used.

A copy of the Periodic Table is printed on page 16.

You may lose marks if you do not show your working or if you do not use appropriate units.

At the end of the examination, fasten all your work securely together.

The number of marks is given in brackets [ ] at the end of each question or part question.

This syllabus is regulated for use in England, Wales and Northern Ireland as a Cambridge International Level 1/Level 2 Certificate.

This document consists of **13** printed pages and **3** blank pages.

1 The names of eight substances are given.

aluminium oxide

calcium oxide

ethanol

nitrogen

iron(III) oxide

methane

oxygen

silicon(IV) oxide

Answer the following questions about these substances.

Each substance may be used once, more than once or not at all.

State which substance is:

(a) the main constituent of natural gas

..... [1]

(b) a reactant in respiration

..... [1]

(c) the main constituent of bauxite

..... [1]

(d) a product of photosynthesis

..... [1]

(e) a greenhouse gas

..... [1]

(f) a macromolecular solid.

..... [1]

[Total: 6]

2 (a)  $^{22}_{11}\text{Na}$ ,  $^{23}_{11}\text{Na}$  and  $^{24}_{11}\text{Na}$  are isotopes of sodium.

(i) Describe how these sodium isotopes are the same and how they are different in terms of the total number of protons, neutrons and electrons in each.

same .....

.....

different .....

.....

[3]

(ii) Why do all **three** isotopes have an overall charge of zero?

.....

..... [1]

(iii) Why do all **three** isotopes have the same chemical properties?

.....

..... [2]

(iv) Why do sodium ions have a charge of +1?

.....

..... [1]

(b) Carbon is an element which exists in different forms.

(i) Name **two** forms of the element carbon that have giant covalent structures.

..... and ..... [1]

(ii) Name the oxide of carbon that is a toxic gas.

..... [1]

[Total: 9]

3 This question is about phosphorus and compounds of phosphorus.

(a) Phosphorus has the formula  $P_4$ . Some properties of  $P_4$  are shown.

melting point/ $^{\circ}C$	45
boiling point/ $^{\circ}C$	280
electrical conductivity	non-conductor
solubility in water	insoluble

(i) Name the type of bonding that exists between the atoms in a  $P_4$  molecule.

..... [1]

(ii) Explain, in terms of attractive forces between particles, why  $P_4$  has a low melting point.

.....  
 ..... [1]

(iii) Explain why phosphorus is a non-conductor of electricity.

.....  
 ..... [1]

(b) Phosphorus,  $P_4$ , reacts with air to produce phosphorus(V) oxide,  $P_4O_{10}$ .

(i) Write a chemical equation for this reaction.

..... [2]

(ii) What type of chemical reaction is this?

..... [1]

(c) Phosphorus(V) oxide,  $P_4O_{10}$ , is an acidic oxide.

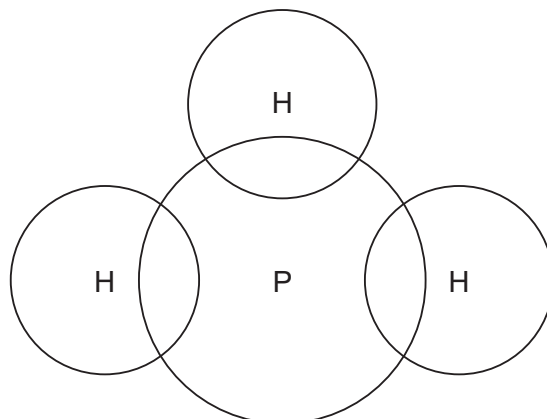
Phosphorus(V) oxide,  $P_4O_{10}$ , reacts with aqueous sodium hydroxide to form a salt containing the phosphate ion,  $PO_4^{3-}$ . Water is the only other product.

Write a chemical equation for the reaction between phosphorus(V) oxide and aqueous sodium hydroxide.

..... [2]

(d) Phosphine has the formula  $\text{PH}_3$ .

Complete the dot-and-cross diagram to show the electron arrangement in a molecule of phosphine. Show outer shell electrons only.



[2]

(e) Phosphine,  $\text{PH}_3$ , has a similar chemical structure to ammonia,  $\text{NH}_3$ .

Ammonia acts as a base when it reacts with sulfuric acid.

(i) What is meant by the term *base*?

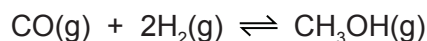
..... [1]

(ii) Write a chemical equation for the reaction between ammonia and sulfuric acid.

..... [2]

[Total: 13]

- 4 Methanol is made industrially by reacting carbon monoxide with hydrogen. The gases react at a temperature of 250 °C and a pressure of 75 atmospheres.



The forward reaction is exothermic.

- (a) Suggest a source of hydrogen for this industrial process.

..... [1]

- (b) Complete the table using only the words *increases*, *decreases* or *no change*.

	effect on the rate of the reverse reaction	effect on the equilibrium yield of CH <sub>3</sub> OH(g)
adding a catalyst		no change
increasing the temperature	increases	
decreasing the pressure		

[4]

- (c) Methanol is a member of the homologous series of alcohols.

- (i) State **two** general characteristics of a homologous series.

1 .....

2 .....

[2]

- (ii) Draw the structures of **two** different alcohols, each containing **three** carbon atoms. Show all of the atoms and all of the bonds.

Name these **two** alcohols.

name .....

name .....

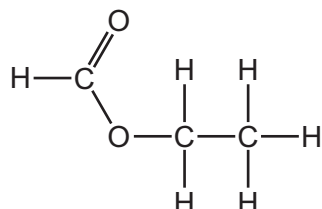
[4]

- (iii) What term is used to describe compounds with the same molecular formula but different structural formulae?

..... [1]

- (d) Alcohols react with carboxylic acids to produce esters.

- (i) The structure of ester **X** is shown.



Name ester **X**.

..... [1]

- (ii) Give the name of the carboxylic acid and the alcohol that react together to produce ester **X**.

carboxylic acid .....

alcohol .....

[2]

- (iii) Ester **Y** is different from ester **X** but also has the formula  $C_3H_6O_2$ .

Draw the structure of ester **Y**. Show all of the atoms and all of the bonds.

..... [2]

[Total: 17]

5 Copper(II) sulfate crystals,  $\text{CuSO}_4 \cdot 5\text{H}_2\text{O}$ , are hydrated.

Copper(II) sulfate crystals are made by reacting copper(II) carbonate with dilute sulfuric acid.

The equation for the overall process is shown.



**step 1** Powdered solid copper(II) carbonate is added to  $50.0 \text{ cm}^3$  of  $0.05 \text{ mol/dm}^3$  sulfuric acid until the copper(II) carbonate is in excess.

**step 2** The excess of copper(II) carbonate is separated from the aqueous copper(II) sulfate.

**step 3** The aqueous copper(II) sulfate is heated until the solution is saturated.

**step 4** The solution is allowed to cool and crystallise.

**step 5** The crystals are removed and dried.

(a) Calculate the maximum mass of the copper(II) sulfate crystals,  $\text{CuSO}_4 \cdot 5\text{H}_2\text{O}$ , that can form using the following steps.

- Calculate the number of moles of  $\text{H}_2\text{SO}_4$  in  $50.0 \text{ cm}^3$  of  $0.05 \text{ mol/dm}^3$   $\text{H}_2\text{SO}_4$ .

..... mol

- Determine the number of moles of  $\text{CuSO}_4 \cdot 5\text{H}_2\text{O}$  that can form.

..... mol

- The  $M_r$  of  $\text{CuSO}_4 \cdot 5\text{H}_2\text{O}$  is 250.

Calculate the maximum mass of  $\text{CuSO}_4 \cdot 5\text{H}_2\text{O}$  that can form.

..... g  
[3]



- (b) **Steps 1–5** were done correctly but the mass of crystals obtained was less than the maximum mass.

Explain why.

..... [1]

- (c) State **two** observations that would indicate that the copper(II) carbonate is in excess in **step 1**.

1 .....

2 ..... [2]

- (d) When the reaction in **step 1** is done using lumps of copper(II) carbonate instead of powder, the rate of reaction decreases. All other conditions are kept the same.

Give a reason for this. Explain your answer in terms of particles.

.....  
 .....  
 ..... [2]

- (e) Name a different substance, other than copper(II) carbonate, that could be added to dilute sulfuric acid to produce copper(II) sulfate in **step 1**.

..... [1]

- (f) Name the process used to separate the aqueous copper(II) sulfate from the excess of copper(II) carbonate in **step 2**.

..... [1]

- (g) The solution of aqueous copper(II) sulfate was heated until it was saturated in **step 3**.

- (i) Suggest what is meant by the term *saturated solution*.

.....  
 .....  
 ..... [2]

- (ii) What evidence would show that the solution was saturated in **step 3**?

..... [1]

- (iii) Why should the aqueous copper(II) sulfate **not** be heated to dryness in **step 3**?

..... [1]

[Total: 14]

6 The halogens are the elements in Group VII of the Periodic Table.

(a) Predict the physical state and colour of astatine at room temperature and pressure.

physical state .....

colour .....

[2]

(b) When chlorine reacts with aqueous potassium bromide a displacement reaction occurs.

(i) Describe the colour change of the solution.

from ..... to .....

[2]

(ii) Write a chemical equation for this reaction.

..... [2]

(c) Reactions occur when some aqueous solutions of halogens are added to aqueous solutions of halides.

Use the key to complete the table to show the results of adding halogens to halides.

key

✓ = reaction

x = no reaction

		halides		
		KCl(aq)	KBr(aq)	KI(aq)
halogens	Cl <sub>2</sub> (aq)		✓	
	Br <sub>2</sub> (aq)			
	I <sub>2</sub> (aq)			

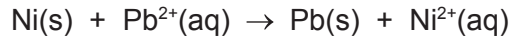
[2]

[Total: 8]

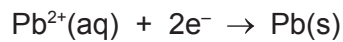
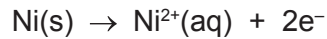
- 7 (a) Displacement reactions occur between metals and metal ions.

Displacement reactions can be used to determine the order of reactivity of metals such as lead (Pb), nickel (Ni), and silver (Ag).

The ionic equation for a displacement reaction is shown.



The ionic half-equations for this reaction are shown.



The ionic half-equations show that electrons are donated by nickel atoms and accepted by lead ions.

- (i) Identify the reducing agent in the displacement reaction. Give a reason for your answer.

reducing agent.....

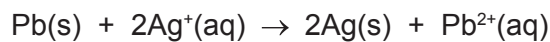
reason.....

[2]

- (ii) What is the general term given to the type of reaction in which electrons are transferred from one species to another?

..... [1]

- (b) The ionic equation for another displacement reaction is shown.



Write the **two** ionic half-equations for this reaction.

1 .....

2 .....

[2]

- (c) Use the information in (a) and (b) to put the **three** metals lead, nickel and silver in order of reactivity.

	most reactive
	↑
	least reactive

[1]

(d) Nickel is a transition element. Nickel is stronger than sodium.

Describe **two** other differences in the physical properties of nickel and sodium.

1 .....

2 .....

[2]

(e) Predict **one** difference in the appearance of aqueous solutions of nickel compounds compared to aqueous solutions of sodium compounds.

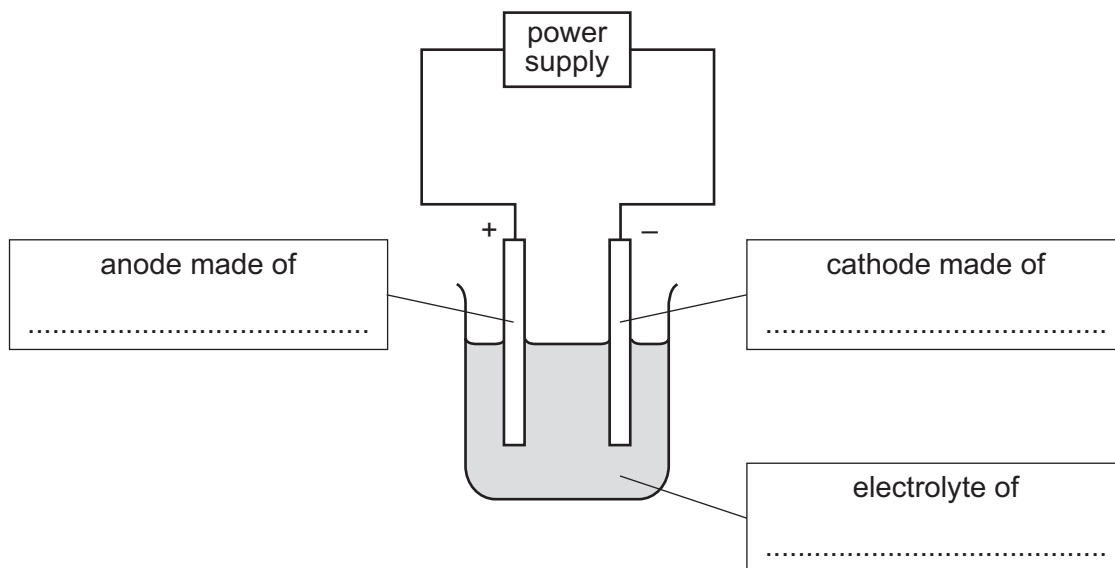
.....

..... [1]

(f) Copper is refined (purified) by electrolysis. Nickel can be refined using a similar method.

(i) The diagram shows the refining of nickel by electrolysis.

Complete the labels in the boxes.



[3]

(ii) Indicate, by writing **N** on the diagram, where nickel is produced.

[1]

[Total: 13]





**BLANK PAGE**

---

Permission to reproduce items where third-party owned material protected by copyright is included has been sought and cleared where possible. Every reasonable effort has been made by the publisher (UCLES) to trace copyright holders, but if any items requiring clearance have unwittingly been included, the publisher will be pleased to make amends at the earliest possible opportunity.

To avoid the issue of disclosure of answer-related information to candidates, all copyright acknowledgements are reproduced online in the Cambridge Assessment International Education Copyright Acknowledgements Booklet. This is produced for each series of examinations and is freely available to download at [www.cambridgeinternational.org](http://www.cambridgeinternational.org) after the live examination series.

Cambridge Assessment International Education is part of the Cambridge Assessment Group. Cambridge Assessment is the brand name of the University of Cambridge Local Examinations Syndicate (UCLES), which itself is a department of the University of Cambridge.

## The Periodic Table of Elements

		Group																																	
I	II	III	IV	V	VI	VII	VIII																												
1	2	3	4	5	6	7	8	9	10	11	12	13	14	15	16	17	18																		
Li lithium 7	Be beryllium 9	B boron 11	C carbon 12	Al aluminium 13	Si silicon 14	P phosphorus 15	S sulfur 16	Cl chlorine 17	Ar argon 18	K potassium 19	Ca calcium 20	Sc scandium 21	Ti titanium 22	V vanadium 23	Cr chromium 24	Mn manganese 25	Fe iron 26	Co cobalt 27	Ni nickel 28	Cu copper 29	Zn zinc 30	Ga gallium 31	Ge germanium 32	As arsenic 33	Se selenium 34	Br bromine 35	Kr krypton 36								
37	38	39	40	41	42	43	44	45	46	47	48	49	50	51	52	53	54	55	56	57-71 lanthanoids	72	73	74	75	76	77	78	79	80	81	82	83	84	85	86
Rb rubidium 85	Sr strontium 88	Y yttrium 89	Zr zirconium 90	Nb niobium 91	Mo molybdenum 92	Tc technetium 93	Ru ruthenium 101	Rh rhodium 103	Pd palladium 106	Ag silver 108	Cd cadmium 112	In indium 115	Sn tin 119	Sb antimony 122	Te tellurium 128	I iodine 127	Xe xenon 131	Cs caesium 133	Ba barium 137	La lanthanum 139	Hf hafnium 178	Ta tantalum 181	W tungsten 184	Re rhenium 186	Os osmium 190	Ir iridium 192	Pt platinum 195	Au gold 197	Hg mercury 201	Tl thallium 204	Pb lead 207	Bi bismuth 209	Po polonium 210	At astatine 210	Rn radon 222
87	88	89-103 actinoids	104	105	106	107	108	109	110	111	112	113	114	115	116	117	118	119	120	121	122	123	124	125	126	127	128	129	130	131	132	133	134	135	136
Fr francium	Ra radium	Ac actinium	Rf rutherfordium	Db dubnium	Sg seaborgium	Bh bohrium	Hs hassium	Mt meitnerium	Ds darmstadtium	Rg roentgenium	Cn copernicium	Nh nihonium	Fl flerovium	Uu unbinilium	Uub unbinilium	Uuc unbinilium	Uud unbinilium	Uue unbinilium	Uuq unbinilium	Uur unbinilium	Uus unbinilium	Uut unbinilium	Uuq unbinilium	Uur unbinilium	Uus unbinilium	Uut unbinilium	Uuq unbinilium	Uur unbinilium	Uus unbinilium	Uut unbinilium	Uuq unbinilium	Uur unbinilium	Uus unbinilium	Uut unbinilium	

## Key

atomic number  
atomic symbol  
name  
relative atomic mass

1  
H  
hydrogen  
1

lanthanoids	57 La lanthanum 139	58 Ce cerium 140	59 Pr praseodymium 141	60 Nd neodymium 144	61 Pm promethium	62 Sm samarium 150	63 Eu europium 152	64 Gd gadolinium 157	65 Tb terbium 159	66 Dy dysprosium 163	67 Ho holmium 165	68 Er erbium 167	69 Tm thulium 169	70 Yb ytterbium 173	71 Lu lutetium 175
actinoids	89 Ac actinium	90 Th thorium 232	91 Pa protactinium 231	92 U uranium 238	93 Np neptunium	94 Pu plutonium	95 Am americium	96 Cm curium	97 Bk berkelium	98 Cf californium	99 Es einsteinium	100 Fm fermium	101 Md mendelevium	102 No nobelium	103 Lr lawrencium

The volume of one mole of any gas is 24 dm<sup>3</sup> at room temperature and pressure (r.t.p.).